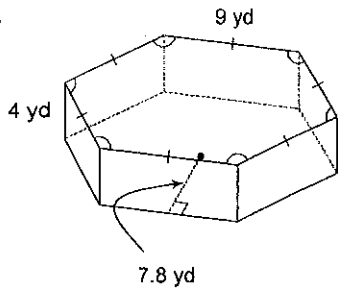


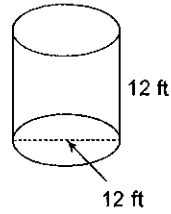
Assignment

Find the surface area of each figure. Round your answers to the nearest whole, if necessary.

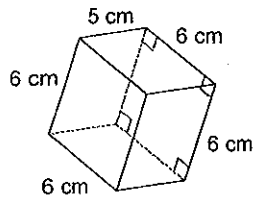
1)



2)



3)



4)

