

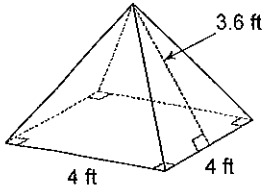
Assignment

Name _____

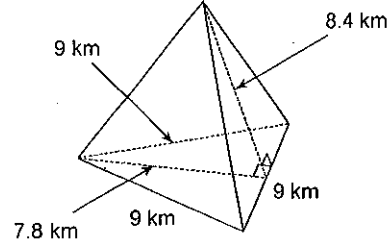
Date _____ Period _____

Find the lateral area and surface area of each figure. Round your answers to the nearest hundredth, if necessary. Leave your answers in terms of π for answers that contain π .

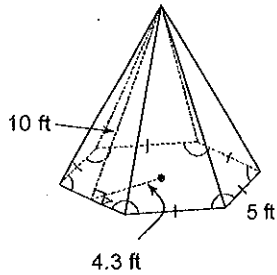
1),



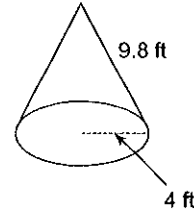
2)



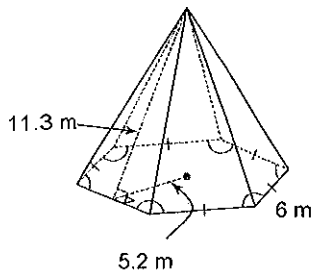
3)



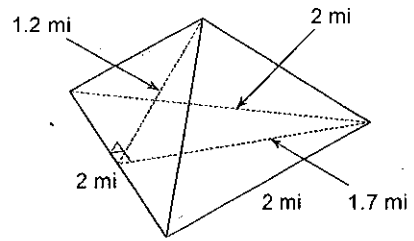
4)



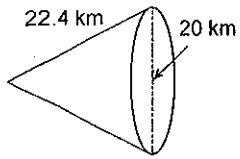
5)



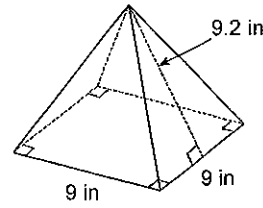
6)



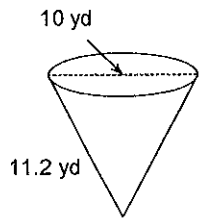
7)



8)



9)



10)

